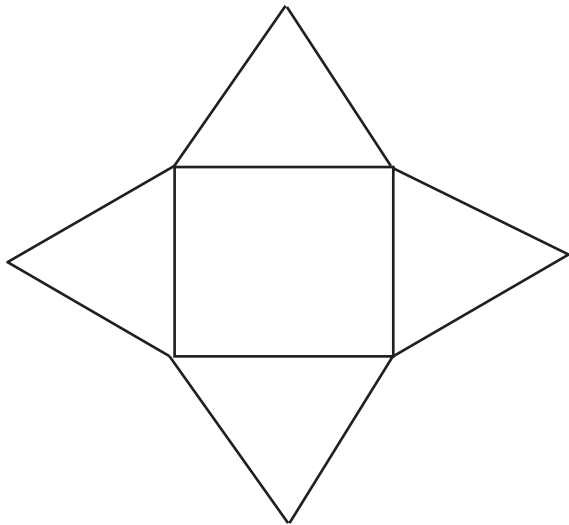
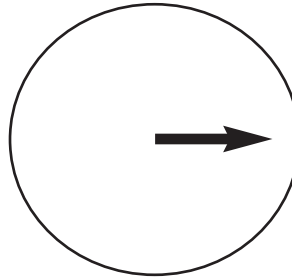


15. Which shape can be formed using the net below?

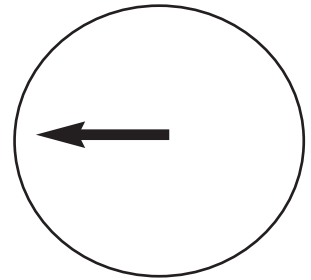


- cube
- sphere
- cylinder
- square-based pyramid

16. Mr. Ho is listening to his car radio. This is his volume control.



POSITION A



POSITION B

He makes the sound louder.
What fraction of a turn is the change from position A to position B?

- 1/4
- 1/3
- 1/2
- 2/3